

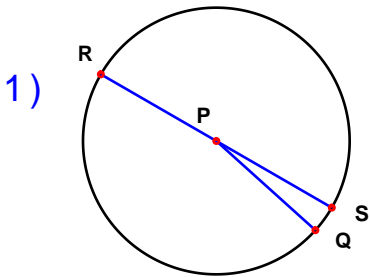
Name : _____

Score : _____

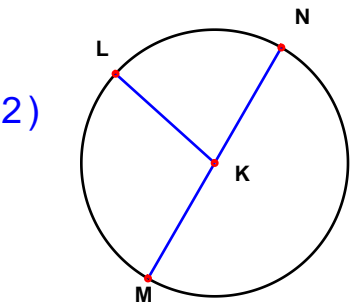
Teacher : _____

Date : _____

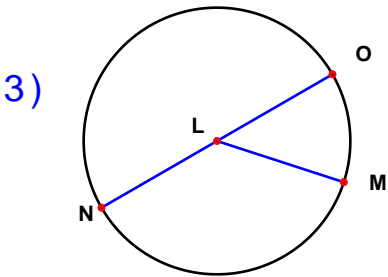
Identify the elements for each problem.



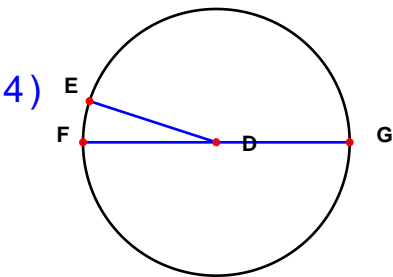
Circle: _____
Radius: _____
Diameter: _____



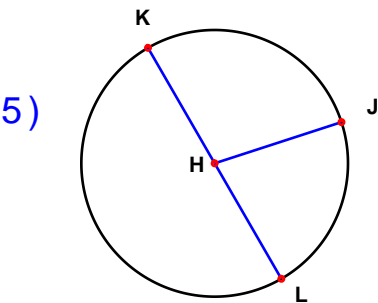
Circle: _____
Radius: _____
Diameter: _____



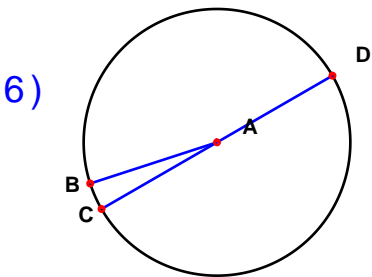
Circle: _____
Radius: _____
Diameter: _____



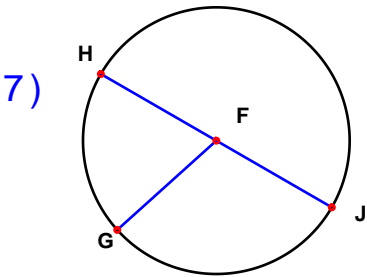
Circle: _____
Radius: _____
Diameter: _____



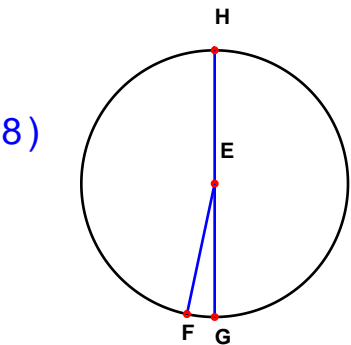
Circle: _____
Radius: _____
Diameter: _____



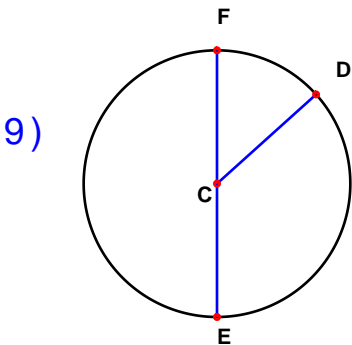
Circle: _____
Radius: _____
Diameter: _____



Circle: _____
Radius: _____
Diameter: _____



Circle: _____
Radius: _____
Diameter: _____



Circle: _____
Radius: _____
Diameter: _____

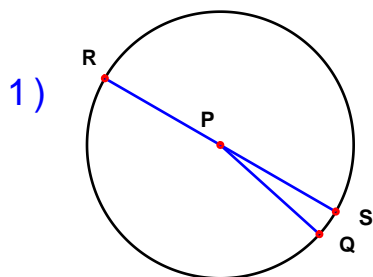
Name : _____

Score : _____

Teacher : _____

Date : _____

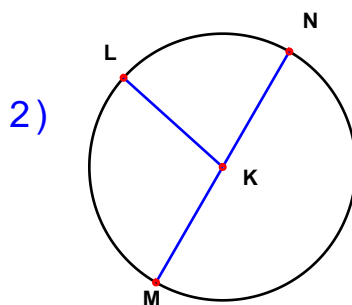
Identify the elements for each problem.



Circle: P

Radius: PQ PR PS

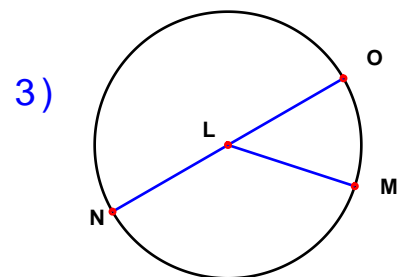
Diameter: RS



Circle: K

Radius: KL KM KN

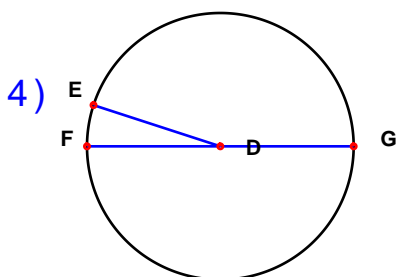
Diameter: MN



Circle: L

Radius: LM LN LO

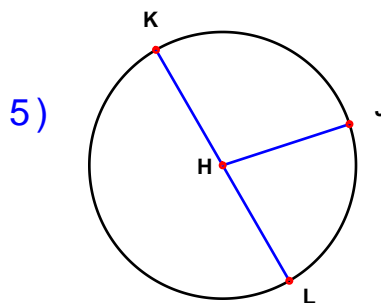
Diameter: NO



Circle: D

Radius: DE DF DG

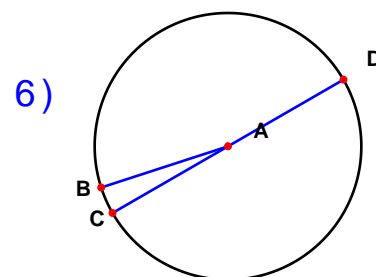
Diameter: FG



Circle: H

Radius: HJ HK HL

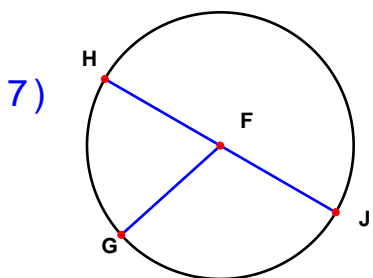
Diameter: KL



Circle: A

Radius: AB AC AD

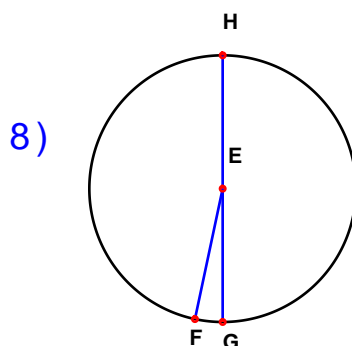
Diameter: CD



Circle: F

Radius: FG FH FJ

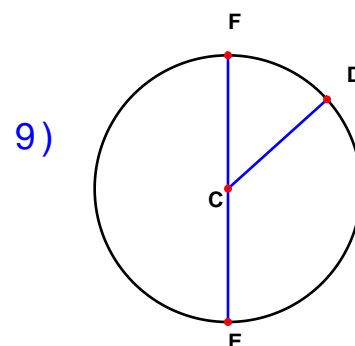
Diameter: HJ



Circle: E

Radius: EF EG EH

Diameter: GH



Circle: C

Radius: CD CE CF

Diameter: EF